

Mathematics in Context

Sample Assessment Materials

Pearson Edexcel Level 3 Certificate in

Mathematics in Context (7MC0)

First certification from 2016

Issue 3

Pearson Edexcel Level 3 Certificate in Mathematics in Context (7MC0)

Sample Assessment Materials

First Certification 2016

Edexcel, BTEC and LCCI qualifications

Edexcel, BTEC and LCCI qualifications are awarded by Pearson, the UK's largest awarding body offering academic and vocational qualifications that are globally recognised and benchmarked. For further information, please visit our qualification websites at www.edexcel.com, www.btec.co.uk or www.lcci.org.uk. Alternatively, you can get in touch with us using the details on our contact us page at www.edexcel.com/contactus

About Pearson

Pearson is the world's leading learning company, with 40,000 employees in more than 70 countries working to help people of all ages to make measurable progress in their lives through learning. We put the learner at the centre of everything we do, because wherever learning flourishes, so do people. Find out more about how we can help you and your learners at: www.pearson.com/uk

This document is Issue 3. Key changes are sidelined. We will inform centres of any changes to this issue. The latest issue can be found on our website: qualifications.pearson.com

References to third party material made in these sample assessment materials are made in good faith. Pearson does not endorse, approve or accept responsibility for the content of materials, which may be subject to change, or any opinions expressed therein. (Material may include textbooks, journals, magazines and other publications and websites.)

All information in this document is correct at the time of publication.

Cover photograph: [grass-lifeisgood/getty images](https://www.gettyimages.com)

ISBN 9781446932575

All the material in this publication is copyright

© Pearson Education Limited 2016

Contents

1	Introduction	1
2	General marking guidance	3
3	Paper 1: Comprehension	5
4	Paper 1 Mark Scheme	25
5	Paper 2: Applications	35
6	Paper 2 Mark Scheme	69

Introduction

The Pearson Edexcel Level 3 Certificate in Mathematics in Context is designed for use in schools and colleges.

These sample assessment materials have been developed to support the qualification and will be used as the benchmark in developing the assessment that students will actually take.

General marking guidance

- All candidates must receive the same treatment. Examiners must mark the last candidate in exactly the same way as they mark the first.
- Mark schemes should be applied positively. Candidates must be rewarded for what they have shown they can do rather than be penalised for omissions.
- Examiners should mark according to the mark scheme – not according to their perception of where the grade boundaries may lie.
- All the marks on the mark scheme are designed to be awarded. Examiners should always award full marks if deserved, i.e. if the answer matches the mark scheme. Examiners should also be prepared to award zero marks if the candidate's response is not worthy of credit according to the mark scheme.
- Where some judgement is required, mark schemes will provide the principles by which marks will be awarded and exemplification/indicative content will not be exhaustive.
- When examiners are in doubt regarding the application of the mark scheme to a candidate's response, a senior examiner must be consulted before a mark is given.
- Crossed-out work should be marked **unless** the candidate has replaced it with an alternative response.

Guidance on the use of codes within the mark scheme:

- **B mark** is a standalone mark for accuracy (not linked to a method mark).
- **A mark** is a mark awarded for accuracy.
- **M mark** is a method mark.
- **C mark** is a mark that involves descriptive comment which may or may not contain a numerical solution to the problem.
- **oe** – or equivalent.
- **cao** – correct answer only.
- **ft** – follow through.
- **sc** – special case.
- **awrt** – answers which round to.

Pearson Edexcel Level 3 Certificate

Mathematics in Context

Paper 1: Comprehension

Sample Assessment Materials for first teaching September 2014

Source booklet

Paper Reference

7MC0/01

Do not return this source booklet with the question paper.

Turn over ►

S47579A

©2014 Pearson Education Ltd.



PEARSON

Formulae sheet

There will be no credit for anything you write on this formulae sheet.

$$\text{Mean of a frequency distribution} = \frac{\sum fx}{\sum f}$$

$$\text{Mean of a grouped frequency distribution} = \frac{\sum fx}{\sum f}, \text{ where } x \text{ is the mid-interval value}$$

$$\text{Variance} = \frac{\sum (x - \bar{x})^2}{n}$$

$$\text{Standard deviation (set of numbers)} = \sqrt{\left[\frac{\sum x^2}{n} - \left(\frac{\sum x}{n} \right)^2 \right]}$$

or

$$\sqrt{\left[\frac{\sum (x - \bar{x})^2}{n} \right]}$$

where \bar{x} is the mean of the set of values

$$\text{Standard deviation (discrete frequency distribution)} = \sqrt{\left[\frac{\sum fx^2}{\sum f} - \left(\frac{\sum fx}{\sum f} \right)^2 \right]}$$

or

$$\sqrt{\left[\frac{\sum f(x - \bar{x})^2}{\sum f} \right]}$$

$$\text{Spearman's rank correlation coefficient} = 1 - \frac{6\sum d^2}{n(n^2 - 1)}$$

The product moment correlation coefficient is

$$r = \frac{S_{xy}}{\sqrt{S_{xx}S_{yy}}} = \frac{\sum x_i y_i - \frac{(\sum x_i)(\sum y_i)}{n}}{\sqrt{\left(\sum x_i^2 - \frac{(\sum x_i)^2}{n}\right)\left(\sum y_i^2 - \frac{(\sum y_i)^2}{n}\right)}}$$

The regression coefficient of y on x is $b = \frac{S_{xy}}{S_{xx}}$

Least squares regression line of y on x is $y = a + bx$ where $a = \bar{y} - b\bar{x}$

Arithmetic series

$$u_n = a + (n - 1)d$$

$$S_n = \frac{1}{2}n(a + l) = \frac{1}{2}n[2a + (n - 1)d]$$

Geometric series

$$u_n = ar^{n-1}$$

$$S_n = \frac{a(1 - r^n)}{1 - r}$$

$$S_\infty = \frac{a}{1 - r} \text{ for } |r| < 1$$

There will be no credit for anything you write in this source booklet.

SECTION A: HOUSE PRICES

Data source A

In 2012, 43% of people aged 25–36 owned their own home. Of the first-time buyers (FTB) who bought in 2012, 64% received financial help from their parents.

But it is unlikely future generations will be able to help their offspring in the same way, warns HSBC, the bank which undertook this research.

Its findings, published today, show how much harder it is for 25–36-year-olds to afford a property now than it was for their parents, thanks to bigger deposits, higher house prices and stricter mortgage-lending criteria than previous generations.

	1983	2007	2014
Age of FTB	27	29	29
Property value	£17 021	£129 499	£147 000
LTV ratio	94%	90%	80%
Deposit	£1021	£12 950	£29 400
Borrower income	£8316	£35 000	£35 918

FTB – first-time buyer

LTV – loan-to-value ratio expresses the amount of a mortgage loan as a percentage of the total appraised value of property. For example, if a borrower wants £130 000 to purchase a house worth £250 000, the LTV ratio is $\frac{£130\,000}{£250\,000}$ or 52%.

Data source B

The average house price is rising at 7.3% annually but remains 12% below the 2007 peak.

House prices grew to an average of £175 546 by 31 January 2014, up 7.3% compared to the same period a year ago, according to the Halifax bank.

The UK's biggest mortgage lender said house prices climbed 1.1% in January following a 0.5% fall in December caused by seasonal factors.

The figures will further fuel concerns that a house price bubble is emerging. However, prices are still 12% below the peak of £199 612 in August 2007.

Nicholas Ayre, managing director of homebuying agency Home Fusion, said: 'The definition of a house price bubble is when people will pay anything for a property. This is not what we are seeing here. Many people are still heavily indebted, particularly if they have maxed out on credit cards. This is hardly a market running away with itself.'

But earlier this week economic forecasters the EY Item Club said London is beginning to show 'bubble-like conditions'.

It said the cost of buying in London is 3.5 times more than the average house price in Northern Ireland and over 3.3 times the average in the north east of England. It added that income multiples are now back to pre-crisis levels in London as homeowners take on increasingly expensive mortgages.

The EY Item Club predicted the average house price in London will rise to £600 000 by 2018.

Howard Archer, chief UK economist at IHS Global Insight, said while he does not believe the UK is in the grip of a bubble, house prices look set for strong increases over the coming months – especially as a shortage of available properties is putting pressure on prices in a growing number of locations.

Matthew Pointon, property economist at Capital Economics, said: 'If prices continue to rise by 1.1% per month, house prices on this measure will pass their previous peak by the end of the year, which will stoke concerns that a new house price bubble is forming. But we expect gains will moderate over the year.'

'Rising wholesale interest rates suggest mortgage rates are likely to edge up over the year, curbing demand. And improved selling conditions should mean more homes come onto the market, relieving the upwards pressure on prices.'

Halifax said that more than one million houses were sold in 2013. This is the first time this has happened since 2007, just before the financial crisis struck.

Data source C

London homes increased in value by more than twice the average person's income last year, figures show.

The typical value of properties in the capital rose by £63 000 in the last year, reaching an average of £458 000.

The surge came amid record rises in home prices across the country, according to figures published on Tuesday by the Office for National Statistics (ONS), prompting warnings of 'runaway train' increases. Experts said the rise in London prices was particularly 'extraordinary' when separate figures issued on the same day showed that inflation had fallen to a four-year low.

AVERAGE HOUSE PRICE INCREASE

February 2014 prices, increase from 2013 in brackets



A graph showing average house price increases (source: ONS)

SECTION B: EUROVISION

The Eurovision Song Contest takes place annually. Each country that is part of the European Broadcasting Union is invited to participate and the final line up comprises 10 qualifying countries from the semi-finals and 16 automatic entries to the final. Each country involved in the contest votes for each of the songs featured in the final, with the exception that countries cannot vote for their own entry (so, for example, the televote in the UK will not allow votes in favour of the UK entry).

Data source D

Jury member selection criteria

All jury members are music professionals. They are being asked to judge:

- vocal capacity
- the performance on stage
- the composition and originality of the song
- the overall impression made by the act.

The average age of the jury members across Europe is 40 years old, 79 members are female, 106 are male.

Jury members signed a declaration stating they will vote independently.

The voting rules

Viewers in the countries of the Participating Broadcasters are invited to vote for their favourite songs (without the possibility of voting for the song representing their own country) by means of televoting. In addition, in each participating country there is a National Jury.

With respect to the televoting, the song that has received the highest number of votes shall be ranked first, the song that has received the second highest number of votes shall be ranked second and so on until the last song.

With respect to the National Jury voting, the jury members shall rank first their favourite song, second their second favourite song, third their third favourite song and so on until their least favourite song, which shall be ranked last.

The rankings of the televoting and the National Jury will then, in each of the participating countries, be used to calculate the average rank of each song. This combined ranking will then be transformed to the 'Eurovision system', with the top-ranked song getting 12 points, the second-highest ranked song 10 points and the remaining spots, from 8 points to 1 point, given to the songs ranked 3 to 10.

If there is a tie of two or more songs in the combined ranking between televotes and the jury, the song that obtains a better ranking from the televote will be placed ahead of the other country.

Source information

Data source A taken from:

[www.telegraph.co.uk/finance/personalfinance/borrowing/mortgages/10620187/
First-time-buyers-in-golden-age-for-mortgage-support.html](http://www.telegraph.co.uk/finance/personalfinance/borrowing/mortgages/10620187/First-time-buyers-in-golden-age-for-mortgage-support.html)

© Copyright of Telegraph Media Group Limited 2014.

Data source B taken from:

[www.telegraph.co.uk/finance/personalfinance/houseprices/10621089/
Average-house-price-reaches-175546.html](http://www.telegraph.co.uk/finance/personalfinance/houseprices/10621089/Average-house-price-reaches-175546.html)

© Copyright of Telegraph Media Group Limited 2014.

Data source C taken from:

[www.telegraph.co.uk/finance/personalfinance/houseprices/10768456/
London-house-prices-jump-by-twice-the-average-income.html](http://www.telegraph.co.uk/finance/personalfinance/houseprices/10768456/London-house-prices-jump-by-twice-the-average-income.html)

© Copyright of Telegraph Media Group Limited 2014.

Data source D taken from:

www.eurovision.tv/page/news?id=who_will_be_in_the_expert_juries

Every effort has been made to contact copyright holders to obtain their permission for the use of copyright material. Pearson Education Ltd. will, if notified, be happy to rectify any errors or omissions and include any such rectifications in future editions.

Write your name here

Surname	Other names
---------	-------------

Pearson Edexcel
Level 3 Certificate

Centre Number

--	--	--	--	--

Candidate Number

--	--	--	--	--

Mathematics in Context

Paper 1: Comprehension

Sample Assessment Materials for first teaching September 2014

Time: 1 hour 40 minutes

Paper Reference

7MC0/01

You must have: Ruler graduated in centimetres and millimetres, protractor, pair of compasses, pen, HB pencil, eraser.

Total Marks

Instructions

- Use **black** ink or ball-point pen.
- **Fill in the boxes** at the top of this page with your name, centre number and candidate number.
- Answer **all** questions.
- Answer the questions in the spaces provided – *there may be more space than you need.*
- **Calculators may be used.**
- If your calculator does not have a π button, take the value of π to be 3.142 unless the question instructs otherwise.
- Any diagrams may NOT be accurately drawn, unless otherwise indicated.
- You must **show all your working out** with **your answer clearly identified** at the **end of your solution.**



Information

- The total mark for this paper is 60
- The marks for **each** question are shown in brackets – *use this as a guide as to how much time to spend on each question.*

Advice

- Read each question carefully before you start to answer it.
- Keep an eye on the time.
- Try to answer every question.
- Check your answers if you have time at the end.

Turn over ►

S47579A

©2014 Pearson Education Ltd.

2/2



PEARSON

Refer to **data sources A, B and C** in the source booklet for Questions 2 to 5.

2 Determine whether the average house price at the end of November 2013 was greater or less than the average house price at the end of January 2014.

(3)

.....

.....

.....

.....

.....

.....

.....

.....

(Total for Question 2 is 3 marks)

3 (a) Work out an estimate for the average house price in London in 1983.

(3)

.....

.....

.....

.....

.....

.....

.....

.....

.....

.....

.....

.....

.....

.....

.....

.....

.....

.....

.....

.....

.....

.....

.....


.....

.....

4 By considering the data in the bar chart in **data source C** in the source booklet:

- (a) draw an appropriate diagram on the graph paper provided below in order to determine the nature of the correlation between house prices in February 2014, £ x , and the increase from 2013, £ y , shown in brackets.

(4)



The equation of the line of regression of y on x is

$$y = 0.1734x - 23871$$

The correlation coefficient $r = 0.955$

(b) Interpret this information.

(3)

.....

.....

.....

.....

(Total for Question 4 is 7 marks)

- 5 An estate agent said: ‘If prices continue to rise by 1.1% per month, house prices on this measure will pass their August 2007 peak within 12 months’.

Use figures from **data source B** in the source booklet and appropriate calculations to determine whether or not this statement is correct.

(3)

.....

.....

.....

.....

.....

.....

.....

.....

.....

.....

(Total for Question 5 is 3 marks)

(Total for HOUSE PRICES is 30 marks)

TOTAL FOR SECTION A IS 30 MARKS

8 (i) How many different finalists does each country award a non-zero number of points to?

.....

.....

.....

.....

.....

(ii) Find the mean of the non-zero number of points.

.....

.....

.....

.....

.....

(iii) Find the median of the non-zero number of points.

.....

.....

.....

.....

.....

(5)

(Total for Question 8 is 5 marks)

10 The table below gives some information relating to the total points scored, the final position, the average jury rank and the average televote rank.

Country	Final position	Points	Average jury rank	Average televote rank
Denmark	1	281	6.23	4.97
Azerbaijan	2	234	7.77	5.86
Ukraine	3	214	8.74	5.66
Norway	4	191	8.23	7.14
Russia	5	174	9.67	6.84
Greece	6	152	12.28	6.00
Italy	7	126	9.46	11.70
Malta	8	120	9.54	10.97
The Netherlands	9	114	9.05	11.70
Hungary	10	84	15.59	8.19
Belgium	11	71	9.92	16.03
Moldova	12	71	8.69	16.57

Consider the information for the top 12 countries given in the table.

- (a) Moldova and Belgium should be equally ranked according to the points that they scored. State whether you agree or disagree with their final positions, giving a reason to support your view.

(2)

.....

.....

.....

.....

In order to evaluate the ‘fairness’ of the new system the Eurovision organisers decide to consider the degree of agreement in judgements of the average jury rank, the average televote rank and the final position for each country in the top 12.

The organisers find that Spearman’s rank correlation coefficient between the average jury rank and the final position of each country is 0.608.

The organisers find that Spearman’s rank correlation coefficient between the average televote rank and the final position of each country is 0.903.

- (b) (i) Find Spearman’s rank correlation coefficient for the juries’ judgements and the televote results.

(ii) Which of the three values shows the best degree of agreement? Give a reason for your answer.

.....

.....

.....

.....

.....

.....

.....

Eurovision organisers are considering changing the system next year so that it is based only on the televote results.

(iii) Explain whether or not this is an appropriate change.

.....

.....

.....

.....

.....

.....

.....

(10)

(Total for Question 10 is 12 marks)

(Total for EUROVISION is 30 marks)

TOTAL FOR SECTION B IS 30 MARKS

TOTAL FOR PAPER IS 60 MARKS

Paper 1: Comprehension – Mark Scheme

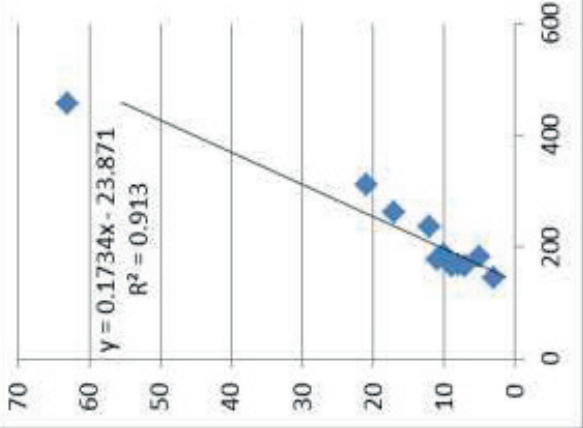
SECTION A – TASK 1: HOUSE PRICES

Question	Working	Answer	Mark	Notes
1. (a)	0.9×129499 [Alternative: $129499 - (0.1 \times 129499)$] (£)116549.1(0)	£116549.10 £116549.10	M1 A1	for method to find 90% of £129499 [for method to find £129499 – 10% of £129499] or equivalent A1 £116549.1(0)
(b) I	<p>Deposit as a proportion of property value</p> $\frac{1021}{17021} \text{ and } \frac{29400}{147000} \text{ seen (or equivalent)}$ <p>awrt 0.06 and 0.2 seen or awrt 6% and 20% seen</p> <p>conclusion that the deposit in 2014 is a higher proportion of the property value than in 1983</p>		M1 A1 C1	<p>Deposit as a proportion of property value</p> <p>attempt ratio or percentage comparison between deposit and property value for both 1983 and 2014</p> <p>both ratios/percentages correct</p> <p>using their figures as justification</p>
(b) II	<p>Borrower income as a proportion of property value</p> $\frac{8316}{17021} \text{ and } \frac{5918}{147000} \text{ seen (or equivalent)}$		M1	<p>Borrower income as a proportion of property value</p> <p>attempt ratio or percentage comparison between income and property value for both 1983 and 2014</p>

Question	Working	Answer	Mark	Notes
	awrt 0.5 and accept awrt 0.2 seen or awrt 50% and accept awrt 20% seen conclusion that the income in 1983 is a higher proportion of the property value than in 2014 (or vice versa)		A1 C1	A1 both ratios/percentages correct C1 using their figures as justification
(b) III	Deposit as a proportion of borrower income $\frac{1021}{8316}$ and $\frac{29400}{35918}$ seen (or equivalent) (awrt) 0.1 and (awrt) 0.8 seen or (awrt) 10% and (awrt) 80% seen conclusion that the deposit in 1983 is a lower proportion of the income than in 2014 (or vice versa)		M1 A1 C1	Deposit as a proportion of borrower income attempt ratio or percentage comparison between deposit and borrower income for both 1983 and 2014 both ratios/percentages correct using their figures as justification
			C1 B2	only for comparison using figures straight from table or statements from article B1 for each statement (maximum 2 marks), Examples: older FTB in 2014 than 1983 suggests it is harder property value has increased amount of mortgage has increased bigger deposits in 2014 than 1983 higher house prices in 2014 than 1983 stricter mortgage lending criteria in 2014

Question	Working	Answer	Mark	Notes
2.	$N \times 0.995 \times 1.011 = 175546$ $N = \frac{175546}{(0.995 \times 1.011)}$ $N = 174508.54$	Greater and 174508.54	M1 A1 C1	<p>NB: these comparisons could be made the 'opposite' way round.</p> <p>a correct equation linking Nov (N) and Jan figures, for example:</p> <p>$N \times 0.995 \times 1.011 = \text{Jan}$ or</p> <p>$N \times 0.995 \times 1.011 = 175546$ or</p> <p>0.995×1.011 (accept values to 2 decimal places for this mark)</p> <p>A1 174508 – 174509 or 1.00594 – 1.00595</p> <p>C1 conclusion consistent with value found (this mark is dependent on previous M1)</p>
3. (a)	$\frac{17021}{147000}$ $\frac{17021}{147000} \times 458000$	£53 031.41	M1 M1 A1	$\frac{17021}{147000}$ or equivalent $\frac{17021}{147000} \times 458000$ or equivalent for £53 031 (accept awrt) or £53 000 or £53 031.41
(b)	$458000 \times n^4 = 600\,000$ $n = \left(\frac{600000}{458000} \right)^{\frac{1}{4}} = (600000/458000)^{0.25}$		M1	$458000 \times n^4 = 600\,000$ or '53 031.41' $\times n^{3.1} = 458\,000$ one correct expression with n the subject ($n \Rightarrow$)

Question	Working	Answer	Mark	Notes
	$n = 1.0698464$ $'53\ 031.4' \times n^{31} = 458\ 000$ $n = \left(\frac{458000}{'53031.4'} \right)^{\frac{1}{31}}$ $n = 1.0720234$	1.0698464... and 1.0720234... first valid assumption second valid assumption	A1 C1 C1 C1	one correct answer 1.0698464... or 1.0720234 ... both values correct and a correct conclusion one valid assumption, e.g. the house prices given are exact and have not been rounded to the nearest thousand a second valid assumption, e.g. the average house prices are proportional to the property values given in the table

Question	Working	Answer	Mark	Notes
4. (a)		Correct diagram	M1 M1 A1 B1 Series1 Linear (Series1)	scatter graph at least 5 points plotted correctly all points plotted correctly consistent linear scale on both axes
(b)		Valid comment for gradient in context Valid comment for intercept in context Valid comment for correlation coefficient in context	C1 C1 C1	valid comment for the gradient in context, e.g. the more expensive the house the greater the increase in price valid comment for the intercept in context, e.g. using 2014 prices rather than the 2013 prices valid comment for the correlation coefficient, e.g. very high linear correlation between 2014 prices and increase in price

Question	Working	Answer	Mark	Notes
5.	$175546 \times 1.011^{12} = 200172.68$ and correct statement or $1.011^{12} = 1.140286$ and correct statement	200172.68 or 1.140286 and correct statement	M1 M1 A1 C1ft	$for\ 175\ 000\ (or\ 175546) \times 1.011^{12}$ $(allow\ 1.011^{11})$ or $for\ 1.011^{12}\ or\ 1.011^{11}\ evaluated$ $accept\ awrt\ 200170\ or\ accept\ awrt\ 1.14$ C1 for comparison of their value with £199 612 and consistent conclusion (ft on their value dependent on previous M mark)

SECTION B – TASK 2: EUROVISION

Question	Working	Answer	Mark	Notes
6.	$(79 + 106) \times 40 = 185 \times 40$ $= 7400$	7400	M1 A1	$(79 + 106) \times 40$ or 185×40 7400
7.	$\frac{79}{(79 + 106)} \times 100$ $= \frac{79}{185} \times 100$ $= 42.702702$	42.702702 %	M1 A1	$\frac{79}{(79 + 106)}$ or $\frac{79}{185}$ seen $\frac{79}{185} \times 100 = 42.702702\dots(\%)$ (accept awrt 42.7)
8.		10	B1	States 10
(a)(i)			M1	$\frac{(1 + 2 + 3 + 4 + 5 + 6 + 7 + 8 + 10 + 12)}{10}$ ft on part (a)
(ii)	$\frac{(1 + 2 + 3 + 4 + 5 + 6 + 7 + 8 + 10 + 12)}{10}$ $= \frac{58}{10}$ $= 5.8$	5.8	A1	$\frac{58}{10} = 5.8$

Question	Working	Answer	Mark	Notes																																																			
(iii)	$\frac{(5 + 6)}{2}$	5.5	M1 A1 or B2	identifies 'middle' values add their two 'consecutive' values and divide by 2 Median = 5.5																																																			
9.	<table border="1"> <thead> <tr> <th>Country</th> <th>Jury</th> <th>Comb</th> <th>Pts</th> </tr> </thead> <tbody> <tr> <td>Ukraine</td> <td>11</td> <td>4</td> <td>7</td> </tr> <tr> <td>Norway</td> <td>5</td> <td>9 (7=)</td> <td>2</td> </tr> <tr> <td>Armenia</td> <td>10</td> <td>7 (7=)</td> <td>4</td> </tr> <tr> <td>Austria</td> <td>12</td> <td>6</td> <td>5</td> </tr> <tr> <td>Germany</td> <td>6</td> <td>3</td> <td>8</td> </tr> <tr> <td>Sweden</td> <td>9</td> <td>5</td> <td>6</td> </tr> <tr> <td>Finland</td> <td>3.5</td> <td>11</td> <td>0</td> </tr> <tr> <td>Spain</td> <td>8</td> <td>10</td> <td>1</td> </tr> <tr> <td>Switz</td> <td>3.5</td> <td>2</td> <td>10</td> </tr> <tr> <td>Malta</td> <td>2</td> <td>12</td> <td>0</td> </tr> <tr> <td>Denmark</td> <td>7</td> <td>8 (7=)</td> <td>3</td> </tr> <tr> <td>Neth</td> <td>1</td> <td>1</td> <td>12</td> </tr> </tbody> </table>	Country	Jury	Comb	Pts	Ukraine	11	4	7	Norway	5	9 (7=)	2	Armenia	10	7 (7=)	4	Austria	12	6	5	Germany	6	3	8	Sweden	9	5	6	Finland	3.5	11	0	Spain	8	10	1	Switz	3.5	2	10	Malta	2	12	0	Denmark	7	8 (7=)	3	Neth	1	1	12	Ukraine = 7pts Norway = 2 Armenia = 4 Austria = 5 Germany = 8 Sweden = 6 Finland = 0 Spain = 1 Switz = 10 Malta = 0 Denmark = 3 Neth'nds = 12	Jury column M1 at least 6 rankings correct A1 all rankings correct B1 Finland and Switzerland equal rank Combined column M1 at least 6 rankings correct B1 Norway, Armenia and Denmark equal rank B1 Armenia, Denmark, Norway ranked consecutively decreasing (using televote criteria given equal combined rank) A1 all rankings correct Points column B1 Finland and Malta 0 points B1 all correct
Country	Jury	Comb	Pts																																																				
Ukraine	11	4	7																																																				
Norway	5	9 (7=)	2																																																				
Armenia	10	7 (7=)	4																																																				
Austria	12	6	5																																																				
Germany	6	3	8																																																				
Sweden	9	5	6																																																				
Finland	3.5	11	0																																																				
Spain	8	10	1																																																				
Switz	3.5	2	10																																																				
Malta	2	12	0																																																				
Denmark	7	8 (7=)	3																																																				
Neth	1	1	12																																																				

Question	Working	Answer	Mark	Notes																																																								
10. (a)	Agree or disagree with consistent supporting statement	View and consistent statement	C1	agree or disagree with a supporting statement																																																								
			C1	a full supporting statement consistent with view and valid																																																								
				For example:																																																								
				Agree since Moldova has got a better (lower) average jury rank (8.69 against 9.92)																																																								
				Agree since Moldova has got a better (lower) average jury rank + average televote rank (25.26 against 25.95)																																																								
				Disagree since Moldova has got a worse (higher) average televote rank (16.57 against 16.03)																																																								
(b)(i)	<table border="1" data-bbox="671 1346 1209 1845"> <thead> <tr> <th>Jury</th> <th>Tele</th> <th>d</th> <th>d²</th> </tr> </thead> <tbody> <tr><td>1</td><td>1</td><td>0</td><td>0</td></tr> <tr><td>2</td><td>3</td><td>1</td><td>1</td></tr> <tr><td>5</td><td>2</td><td>3</td><td>9</td></tr> <tr><td>3</td><td>6</td><td>3</td><td>9</td></tr> <tr><td>9</td><td>5</td><td>4</td><td>16</td></tr> <tr><td>11</td><td>4</td><td>7</td><td>49</td></tr> <tr><td>7</td><td>9.5</td><td>2.5</td><td>6.25</td></tr> <tr><td>8</td><td>8</td><td>0</td><td>0</td></tr> <tr><td>6</td><td>9.5</td><td>3.5</td><td>12.25</td></tr> <tr><td>12</td><td>7</td><td>5</td><td>25</td></tr> <tr><td>4</td><td>12</td><td>8</td><td>64</td></tr> <tr><td>10</td><td>11</td><td>1</td><td>1</td></tr> <tr><td></td><td></td><td></td><td>192.5</td></tr> </tbody> </table>	Jury	Tele	d	d ²	1	1	0	0	2	3	1	1	5	2	3	9	3	6	3	9	9	5	4	16	11	4	7	49	7	9.5	2.5	6.25	8	8	0	0	6	9.5	3.5	12.25	12	7	5	25	4	12	8	64	10	11	1	1				192.5		M1	attempts to rank jury and televote values (either way round but consistent)
Jury	Tele	d	d ²																																																									
1	1	0	0																																																									
2	3	1	1																																																									
5	2	3	9																																																									
3	6	3	9																																																									
9	5	4	16																																																									
11	4	7	49																																																									
7	9.5	2.5	6.25																																																									
8	8	0	0																																																									
6	9.5	3.5	12.25																																																									
12	7	5	25																																																									
4	12	8	64																																																									
10	11	1	1																																																									
			192.5																																																									
			B1ft	finds d values consistent with their rankings so far																																																								
			B1ft	finds their d squared values and sums them																																																								
			A1	sums d ² squared values 192.5																																																								

Question	Working	Answer	Mark	Notes
	$SR = 1 - \frac{(6 \times 192.5)}{(12 \times 143)}$		M1	$(SR) = 1 - \frac{(6 \times \text{their sum})}{(12 \times 143)}$ or equivalent
	$= 1 - \frac{35}{52} = \frac{17}{52} = 0.327$	0.327	A1	$\frac{17}{52}$ or 0.327 exact answer (or accept awrt 0.327)
(ii)		0.903	C1	states 0.903
		Valid reason	C1	gives a reason, e.g. from the three values 0.903 is the closest to 1 which indicates complete agreement between the ranks
(iii)		Explain voting method and a reason in favour	C1	explains their preferred method for voting (e.g. televoting only or jury voting only or current system) and one reason in favour of their method (e.g. strongest agreement between tele voting and final rankings, independent jury voting free of bias, a mixture of two views so less chance of social media campaign or equivalent skewing the voting)
		A second reason in favour or against other methods	C1	a second reason in favour of their method or for rejecting a different method

Pearson Edexcel Level 3 Certificate

Mathematics in Context

Paper 2: Applications

Sample Assessment Materials for first teaching September 2014

Source booklet

Paper Reference

7MC0/02

Do not return this source booklet with the question paper.

Turn over ►

S47580A

©2014 Pearson Education Ltd.



PEARSON

Formulae sheet

There will be no credit for anything you write on this formulae sheet.

Mean of a frequency distribution $= \frac{\sum fx}{\sum f}$

Mean of a grouped frequency distribution $= \frac{\sum fx}{\sum f}$, where x is the mid-interval value

Variance $= \frac{\sum (x - \bar{x})^2}{n}$

Standard deviation (set of numbers) $\sqrt{\left[\frac{\sum x^2}{n} - \left(\frac{\sum x}{n} \right)^2 \right]}$

or $\sqrt{\left[\frac{\sum (x - \bar{x})^2}{n} \right]}$

where \bar{x} is the mean of the set of values

Standard deviation
(discrete frequency distribution) $\sqrt{\left[\frac{\sum fx^2}{\sum f} - \left(\frac{\sum fx}{\sum f} \right)^2 \right]}$

or $\sqrt{\left[\frac{\sum f(x - \bar{x})^2}{\sum f} \right]}$

Spearman's rank correlation coefficient $1 - \frac{6\sum d^2}{n(n^2 - 1)}$

The product moment correlation coefficient is

$$r = \frac{S_{xy}}{\sqrt{S_{xx}S_{yy}}} = \frac{\sum x_i y_i - \frac{(\sum x_i)(\sum y_i)}{n}}{\sqrt{\left(\sum x_i^2 - \frac{(\sum x_i)^2}{n}\right)\left(\sum y_i^2 - \frac{(\sum y_i)^2}{n}\right)}}$$

The regression coefficient of y on x is $b = \frac{S_{xy}}{S_{xx}}$

Least squares regression line of y on x is $y = a + bx$ where $a = \bar{y} - b\bar{x}$

Arithmetic series

$$u_n = a + (n - 1)d$$

$$S_n = \frac{1}{2}n(a + l) = \frac{1}{2}n[2a + (n - 1)d]$$

Geometric series

$$u_n = ar^{n-1}$$

$$S_n = \frac{a(1 - r^n)}{1 - r}$$

$$S_\infty = \frac{a}{1 - r} \text{ for } |r| < 1$$

There will be no credit for anything you write in this source booklet.

SECTION A: EUROVISION

The Eurovision Song Contest takes place annually. Each country that is part of the European Broadcasting Union is invited to participate and the final line up comprises 10 qualifying countries from the semi-finals and 16 automatic entries to the final. Each country involved in the contest votes for each of the songs featured in the final, with the exception that countries cannot vote for their own entry (so, for example, the televote in the UK will not allow votes in favour of the UK entry).

Data source A

Jury member selection criteria

All jury members are music professionals. They are being asked to judge:

- vocal capacity
- the performance on stage
- the composition and originality of the song
- the overall impression made by the act.

The average age of the jury members is 40 years old, 79 members are female, 106 are male.

Jury members signed a declaration stating that they will vote independently.

The voting rules

Viewers in the countries of the Participating Broadcasters are invited to vote for their favourite songs (without the possibility of voting for the song representing their own country) by means of televoting. In addition, in each participating country there is a National Jury.

With respect to the televoting, the song which has received the highest number of votes shall be ranked first, the song which has received the second highest number of votes shall be ranked second and so on until the last song.

With respect to the National Jury voting, the jury members shall rank first their favourite song, second their second favourite song, third their third favourite song and so on until their least favourite song, which shall be ranked last.

The rankings of the televoting and the jury will then, in each of the participating countries, be used to calculate the average rank of each song. This combined ranking will then be transformed to the 'Eurovision system', with the top-ranked song getting 12 points, the second-highest ranked song 10 points, and the remaining spots, from 8 points to 1 point, given to the songs ranked 3 to 10.

If there is a tie of two or more songs in the combined ranking between televotes and the jury, the song that obtains a better ranking from the televote will be placed ahead of the other country.

Source information

Data source A taken from: www.eurovision.tv/page/news?id=who_will_be_in_the_expert_juries

Every effort has been made to contact copyright holders to obtain their permission for the use of copyright material. Pearson Education Ltd. will, if notified, be happy to rectify any errors or omissions and include any such rectifications in future editions.

Write your name here

Surname	Other names
---------	-------------

Pearson Edexcel
Level 3 Certificate

Centre Number

--	--	--	--	--

Candidate Number

--	--	--	--	--

Mathematics in Context

Paper 2: Applications

Sample Assessment Materials for first teaching September 2014

Time: 1 hour 40 minutes

Paper Reference

7MC0/02

You must have: Ruler graduated in centimetres and millimetres, protractor, pair of compasses, pen, HB pencil, eraser.

Total Marks

Instructions

- Use **black** ink or ball-point pen.
- **Fill in the boxes** at the top of this page with your name, centre number and candidate number.
- Answer **all** questions.
- Answer the questions in the spaces provided – *there may be more space than you need.*
- **Calculators may be used.**
- If your calculator does not have a π button, take the value of π to be 3.142 unless the question instructs otherwise.
- Any diagrams may NOT be accurately drawn, unless otherwise indicated.
- You must **show all your working out** with **your answer clearly identified** at the **end of your solution**.



Information

- The total mark for this paper is 80
- The marks for **each** question are shown in brackets – *use this as a guide as to how much time to spend on each question.*

Advice

- Read each question carefully before you start to answer it.
- Keep an eye on the time.
- Try to answer every question.
- Check your answers if you have time at the end.

Turn over ►

S47580A

©2014 Pearson Education Ltd.

2/1/



PEARSON

SECTION A

Answer ALL questions. Write your answers in the spaces provided.

EUROVISION

Refer to **data sources A and B** in the source booklet for Questions 1 to 3.

1 Using the spreadsheet ‘**Eurovision 2014 the results**’:

(a) What is the highest total number of points that a song can get?

(2)

.....

.....

.....

.....

.....

.....

.....

.....

(b) Find the values denoted by A, B, C and D in the spreadsheet.

(2)

.....

.....

.....

.....

.....

.....

.....

.....

(Total for Question 1 is 4 marks)

- 2 A summary of the point scores awarded to Austria and the Netherlands is shown in the tables below.

Austria

Score	0	1	2	3	4	5	6	7	8	10	12
Frequency		1	1	1	1	2	1	2	3	7	13

$$\sum fx = 290 \quad \sum fx^2 = 2978$$

Table 1

The Netherlands

Score	0	1	2	3	4	5	6	7	8	10	12
Frequency	9	0	2	2	2	0	0	2	5	7	8

$$\sum fx = 238 \quad \sum fx^2 = 2328$$

Table 2

The information in tables 1 and 2 has been partially summarised in table 3

Figures have been written correct to 3 significant figures where appropriate.

	Median	Mean	Range	Standard Deviation
Austria	10	7.84	12	4.37
The Netherlands				

Table 3

In order to encourage countries with low scores, it is proposed that all scores have 10 added to them.

(b) Describe what effect this proposal would have on the values for Austria in table 3 (2)

.....

.....

.....

.....

.....

.....

.....

.....

An alternative proposal is to double all the scores.

(c) Describe what effect this proposal would have on the values for Austria in table 3 (2)

.....

.....

.....

.....

.....

.....

.....

.....

(Total for Question 2 is 12 marks)

BLANK PAGE

SECTION B

Answer ALL questions. Write your answers in the spaces provided.

TASK 1: VACCINES AND BLOOD GROUPS

4 Kevin teaches at a college.

He carries out a survey of 100 of the students at the college.

He finds out that:

87 students have had the DTP vaccine

77 students have had the Meningitis C (Men C) vaccine

86 students have had the MMR vaccine

75 students have had all three vaccines

2 students have not had any vaccines

2 students have had just the Men C and the MMR vaccine

No students have had just the DTP and MMR vaccines

(a) Work out the probability that a student, chosen at random, has had only the DTP vaccine.

(5)

(b) Two students are chosen at random.

Work out the probability that both students have received fewer than two of the vaccines.

(3)

.....

.....

.....

.....

.....

.....

.....

.....

.....

.....

.....

.....

.....

.....

.....

.....

.....

.....

.....

.....

.....

.....

.....

(Total for Question 4 is 8 marks)

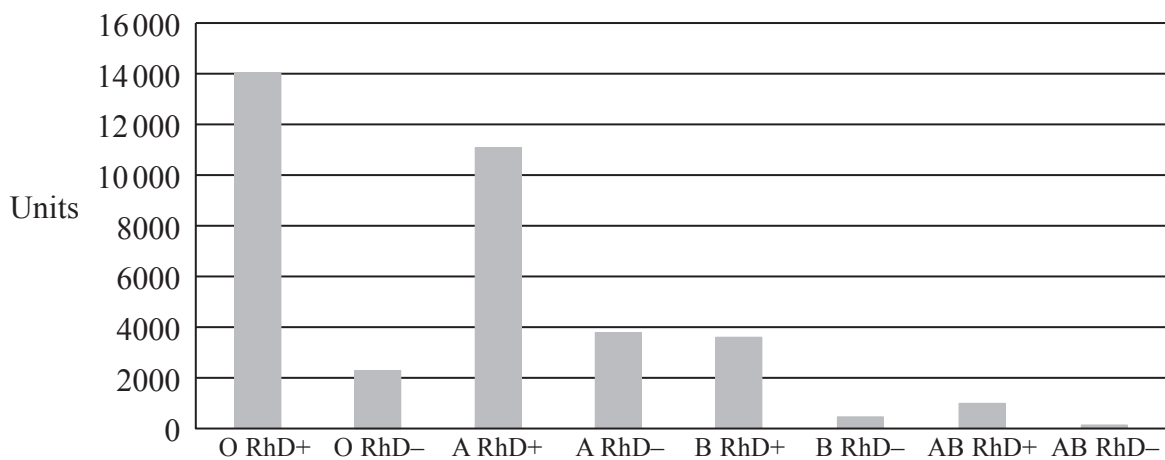
BLANK PAGE

6 Kevin teaches his biology class about blood groups.

Red blood cells sometimes contain a protein known as the RhD antigen. If this is present then the blood group is RhD positive (RhD+). If this is absent then the blood group is RhD negative (RhD-).

UK population		
Blood group	RhD status	Percentage
O	RhD+	37%
	RhD-	7%
A	RhD+	35%
	RhD-	7%
B	RhD+	8%
	RhD-	2%
AB	RhD+	3%
	RhD-	1%

Blood Stocks



(Source: adapted from NHS Blood.co.uk)

Blood is normally stored for a maximum of 30 days.

8 000 units of blood are needed each day by hospitals in the UK.

(a) Is there enough of stock B RhD+ blood available for the next 8 days?

(2)

.....

.....

.....

All the students in Kevin’s biology class test their blood to find out their blood group.

The table shows their results.

Kevin’s class	
Blood group	Number of students
O	13
A	7
B	4
AB	0

A student from Kevin’s biology class is picked at random.

(b) Work out an estimate for the probability that this student is RhD–.

(4)

.....

.....

.....

.....

.....

.....

.....

.....

.....

A person is selected at random from the UK population.

(c) Given that this person is RhD+, work out the probability that they have blood group A.

(2)

.....

.....

.....

.....

(Total for Question 6 is 8 marks)

BLANK PAGE

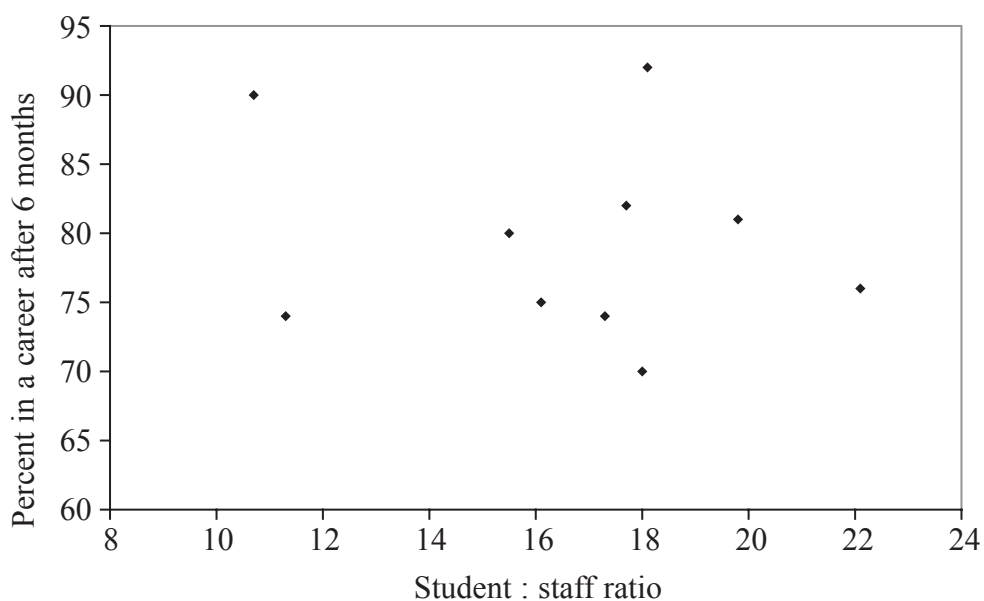
TASK 2: UNIVERSITY

7 Shazia is going to apply to university to study politics.

She finds out this data about politics courses at some universities.

Rating	Name of institution	Survey score (%)	Student satisfaction: % of students satisfied with			Student : staff ratio	Students in a career after 6 months (%)
			course	teaching	feedback		
1	Oxford	100.0	93	94	65	11.3 : 1	74
2	St Andrews	99.7	89	93	71	18.1 : 1	92
3	Cambridge	99.2	98	97	75	16.5 : 1	
4	LSE	98.3	87	87	76	10.7 : 1	90
5	UCL	91.5	78	87	66	15.5 : 1	80
6	Durham	85.9	88	87	74	19.8 : 1	81
7	Surrey	85.2	96	93	86	17.5 : 1	
8	Warwick	82.8	89	91	68	17.7 : 1	82
9	KCL	82.3	91	88	69	18.0 : 1	70
10	Birmingham	82.0	86	92	73	22.1 : 1	76
11	Bristol	80.5	80	91	71	16.1 : 1	75
12	York	79.8	86	92	72	17.3 : 1	74

She wants to know if there is any relationship between the student:staff ratio and the percentage of students in a career after 6 months. She starts by using the information from the table to draw a scatter graph.



Data from: www.theguardian.com/education/table/2013/jun/04/university-guide-politics

(a) Explain what the scatter graph shows about any relationship between the student:staff ratio and the percentage of students in a career after 6 months.

(2)

.....

.....

.....

.....

.....

.....

.....

.....

.....

.....

.....

.....

.....

.....

.....

An outlier can be defined as any value that is:

- greater than the upper quartile $+ (1.5 \times \text{interquartile range})$
- less than the lower quartile $- (1.5 \times \text{interquartile range})$.

(b) (i) Using the graph paper below draw a box plot to show the information from the staff:student ratio column in the table. You must show any outliers on your box plot, along with calculations used to identify these outliers.

.....

.....


.....

.....

.....

.....

.....



(ii) Comment on the statement “ Staff:student ratios are not very different whichever university you look at”

.....

.....

.....

(7)

(Total for Question 7 is 9 marks)

8 Mohammed finished university with a student loan of £14 000.

He started work with a salary of £19 000 per year.

After one year, he had a pay rise of £1500.

At the end of each full year of work:

- 9% of his earnings above £16 365 go towards paying off his loan
- interest of 1.5% of the outstanding amount is added to his loan.

How much will Mohammed still owe on his student loan after 2 full years of work?

(5)

.....

.....

.....

.....

.....

.....

.....

.....

.....

.....

.....

.....

.....

.....

.....

.....

.....

.....

.....

.....

.....

.....

(Total for Question 8 is 5 marks)

BLANK PAGE

- 9 Sarah leaves university with a student loan of £15 000.
The interest rate has changed to 2%.

Sarah can earn £17 000 per year before she starts paying back her student loan.
She starts work with a salary of £20 000.
She expects to get an increase in salary of £1000 per year.

Sarah uses this recurrence relation to work out the amount she will owe on her student loan after n years:

$$S_n = 1.02(S_{n-1} - 180n - 90)$$

where S_n is the amount left to pay on her student loan n years after starting work.

Given that $S_0 = 15\,000$

- (a) show clearly that $S_1 = 15\,024.60$ and find the value of S_2

(2)

Let $T_n = S_n - S_{n-1}$

- (b) (i) Show that $T_{n+1} = 1.02T_n - k$

where k is a constant to be found

TASK 3: COST AND PROFIT

10 A company sells bird tables and bird feeders.

Shop	Number of bird tables	Number of bird feeders	Total order	Total cost (£)
A	50	25	75	1500
B	100	50	150	3000
C	72	18	90	1980
D	80	60	140	2600
E	160	120	280	5200
F	90	50	140	

The price paid by each shop for a bird table was the same.
The price paid by each shop for a bird feeder was the same.
The total cost for shop F is missing.

(i) Complete the table.

.....

.....

.....

.....

.....

.....

.....

.....

(ii) If the price of a bird table had been £1 more and of a bird feeder £1 less how would this have affected the total cost for shop F?

.....

.....

(6)

(Total for Question 10 is 6 marks)

BLANK PAGE

11 The company also makes swing seats and benches.

The manager of the company wants to maximise the profit they get from selling swing seats and benches.

Let x be the number of swing seats made each week.

Let y be the number of benches made each week.

(a) The graph on page 27 shows two constraints and the unwanted region.

(i) Write down the constraints shown on the graph, giving your answers as inequalities in terms of x and/or y .

(ii) Give an interpretation of each of your inequalities.

(4)

.....

.....

.....

.....

.....

.....

.....

.....

.....

.....

It takes 10 production hours to make one swing seat.

It takes 4 production hours to make one bench.

There are 160 production hours available in one week.

(b) Write down an inequality to represent this information.

Give your inequality in its simplest form.

(2)

.....

.....

.....

.....

It takes 30 minutes to get each swing seat ready for delivery.

It takes 20 minutes to get each bench ready for delivery.

There are 10 hours available in one week to get ready for delivery.

(c) Using the information above and the inequality formed in (b), add two lines and shading to the graph on page 27 to show the feasible region.

Label the feasible region **R**.

(5)

.....

.....

.....

.....

.....

.....

The company makes a profit of £65 on each swing seat and £40 on each bench.

(d) Find the maximum profit the company could make in one week.

You should state the number of swing seats and benches they should make to achieve this.

You must make your method of solution clear.

(3)

.....

.....

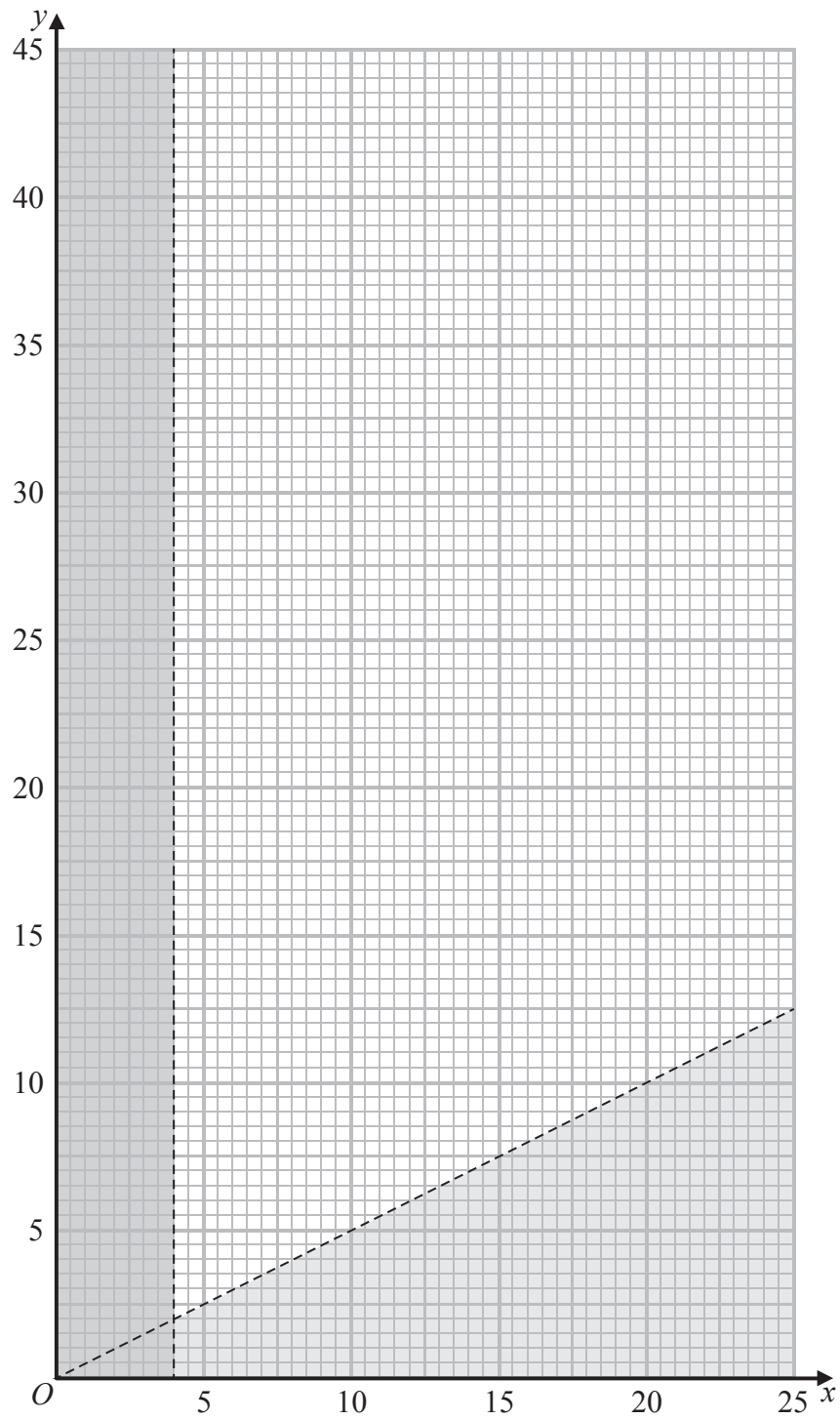
.....

.....

.....

.....

.....



(Total for Question 11 is 14 marks)

TOTAL FOR SECTION B IS 60 MARKS

TOTAL FOR PAPER IS 80 MARKS

BLANK PAGE

Paper 2: Applications – Mark Scheme

SECTION A

TASK 1: EUROVISION

Question	Working	Answer	Mark	Notes
1. (a)	$(37 - 1) \times 12 = 432$	Correct statement	M1	$(37 - 1) \times 12$
(b)	B = 7 D = 4 A = 3 C = 10	432 A = 3 B = 7 C = 10 D = 4	A1 B1 B1	432 A = 3, B = 7, C = 10 and D = 4 two correct from A, B, C, D all four correct
2. (a)(i)		5	B2	B2 cao
(ii)	Median is $\frac{(37 + 1)}{2} = 19$ th value Mean = $\frac{238}{37} = 6.432$ Range 0 to 12 or 12 SD: $\frac{2328}{37} - \left(\frac{238}{37}\right)^2$	8 6.43 0–12 or 12	M1 A1 B1	$\Sigma fx / \Sigma f$ mean = (accept awrt) 6.43 B1 range is 0 to 12 or 12 use of correct formula for variance square root (accept awrt) 4.64
	$\sqrt{21.54\dots}$	4.641415	M1 M1 A1	

Question	Working	Answer	Mark	Notes
2. (b)		The range and the SD would be unaffected	C1	for range and SD unaffected (or equivalent)
		The mean and the median would increase by 10	C1	for mean and median increased by 10 (or equivalent)
(c)		The range and the SD would increase	C1	for range and SD increased (or equivalent)
		The mean and the median would be doubled	C1	for mean and median doubled (or equivalent)
3.	Austria higher mean and median		C2	Austria had a higher mean and median so did better (or equivalent) (C1 for reference to just one measure of location and interpretation)
	Higher mean than Netherlands	Full comparison	C2	Austria had a lower SD so the variation of scores was less (C1 for just a reference to SD with no interpretation)

SECTION B

TASK 1: VACCINES AND BLOOD GROUPS

Question	Working	Answer	Mark	Notes
4. (a)	<p>Appropriate Venn diagram with 3 intersecting circles within a rectangle</p> <p>Correct values displayed in the appropriate areas of the diagram</p> <p>Correct probability stated 0.12</p>	0.12	M1 M1 M1 M1 A1	<p>M1 for 3 intersecting circles within a rectangle</p> <p>M1 for any 3 of 75, 2, 2, and 0 in correct positions</p> <p>M1 for at least 2 correct calculated values</p> <p>M1 for completely correct diagram</p> <p>A1 ft diagram their $\frac{{}^{12}P}{100}$</p>
	<p>or</p> $n(D \text{ or } C \text{ or } R) = n(D) + n(C) + n(R) - n(D\&C) - n(D\&R) - n(C\&R) + n(D\&C\&R)$ $100 - 2 = 87 + 77 + 86 - n(D\&C) - n(D\&R) - n(C\&R) + 75$ $n(C\&R) = 77, (D\&R) = 75$ $n(D\&C) = 75$		M1 M1 M1 M1 A1	<p>or</p> <p>M1 for correct statement of inclusion/exclusion relation</p> <p>M1 for correct substitution of given values</p> <p>M1 for $n(C\&R) = 77, (D\&R) = 75$</p> <p>M1 for $n(D\&C) = 75$</p> <p>A1 ft diagram their $\frac{{}^{12}P}{100}$</p>

Question	Working	Answer	Mark	Notes
4. (b)	$\frac{23}{100} \times \frac{22}{99}$ $= \frac{23}{450} \text{ or } 0.051\dot{1}$		M1 M1 A1	<p>for consideration of students receiving 0 vaccines and/or 1 vaccine</p> <p>for $\frac{23}{100} \times \frac{22}{99}$ (or equivalent)</p> <p>for $\frac{23}{450}$ or 0.051$\dot{1}$ (or equivalent)</p>
5.	$1 - 0.86 (= 0.14)$ 0.86×0.01 <p>or $0.14 \times 0.9 (= 0.126)$</p> $0.86 \times 0.01 + 0.14 \times 0.9$ $= 0.1346$	0.1346	M1 M1 M1 A1	<p>for $P(\text{MMR}') = 1 - 0.86 (= 0.14)$ (may be seen on a tree diagram)</p> <p>for $P(\text{MMR} \cap M) = 0.86 \times 0.01$ or $P(\text{MMR}' \cap M) = 0.14 \times 0.9$</p> <p>for $0.86 \times 0.01 + 0.14 \times 0.9$</p> <p>for 0.1346 – may be rounded to 2 or more significant figures</p>

Question	Working	Answer	Mark	Notes
6. (a)	$3600 \div (8000 \times 0.08)$	No and supporting evidence	M1	M1 (3100 to 3900) \div (8000 \times 0.08)
	or	No and supporting evidence	C1	C1* no and a valid reason, e.g. only enough for 4–6 days M1 8 days \times 8000 = 64000 and '64000' \times 0.08 = 5120 C1* no and a valid reason, e.g. 5120 > 3100 to 3900
(b)	$\frac{7}{44} \times 13 + \frac{7}{42} \times 7 + \frac{2}{10} \times 4$		M1	for $\frac{7}{44} \times 13$ or $\frac{7}{42} \times 7$ or $\frac{2}{10} \times 4$
	$= \frac{2663}{660}$ (= 4.03484848...) Answer above divided by 24		M1	for $\frac{7}{44} \times 13 + \frac{7}{42} \times 7 + \frac{2}{10} \times 4$ (= $\frac{2663}{660}$) for their answer divided by 24 (their answer must come from 3 calculated fractions)
(c)	$= \frac{2663}{15840} = 0.168$	0.168	A1	for answer in range 0.168 – 0.169 (accept fraction, percentage or decimal)
	$0.35 \div (0.37 + 0.35 + 0.08 + 0.03)$		M1	for $0.35 \div (0.37 + 0.35 + 0.08 + 0.03)$ or $0.35 = 0.83 \times P(A \text{RhD}^+)$ or $\frac{n}{83}$
	$= \frac{35}{83}$ or 0.42–0.422	$\frac{35}{83}$	A1	for $\frac{35}{83}$ or 0.42 – 0.422 oe

TASK 2: UNIVERSITY

Question	Working	Answer	Mark	Notes
7. (a)		Reason	B1	B1 for no correlation or negative correlation
(b)(i)	$\text{Median} = \frac{(17.3 + 17.5)}{2} = 17.4$ $\text{Lower Quartile} = 15.5 \times \frac{n}{4}$ $\text{Upper Quartile} = 18 \times \frac{3n}{4}$ $1.5 \times (18 - 15.5) (= 3.75)$ <p>Min = 11.75 Max = 21.75</p> <p>18 + 3.75 = 21.75 so 22.1 outlier 15.5 - 75 = 11.75 so 11.3 and 10.7 outliers</p> <p>Box plot</p>	<p>Explanation</p> <p>Me = 17.4</p> <p>LQ = 15.5</p> <p>UQ = 18</p> <p>Outliers at 10.7 11.3 22.1</p>	<p>B1</p> <p>B1</p> <p>M1</p> <p>M1</p> <p>M1</p> <p>A1</p>	<p>B1 for 'shown by scattered points' or 'shown by line of best fit with negative gradient'</p> <p>M1 for method to find median, e.g. put data in order and attempt to find middle value or median = 17.4</p> <p>for method to find either LQ or UQ or LQ = 15.5 or UQ = 18 for 1.5 × ('18' - '15.5') (= 3.75)</p> <p>for identification of 11.3 and 22.1 as outliers with calculations present and correct</p>
(ii)	<p>Box plot</p> <p>LQ = 15.5, Me = 17.4</p> <p>UQ = 18 Min = 11.75 Max = 21.75</p> <p>Outliers at 10.7 11.3 22.1</p>	<p>The statement is incorrect</p> <p>Full supporting statement</p>	<p>B1</p> <p>B1</p> <p>B1</p>	<p>for a fully-correct box plot showing outliers</p> <p>the statement is incorrect with full supporting statement, e.g. two of the universities have substantially lower student/staff ratios and one university has substantially higher student/staff ratio</p> <p>the statement is incorrect with a supporting statement, e.g. 3 of the universities are substantially different from the rest</p>

Question	Working	Answer	Mark	Notes
8.	$(19000 - 16365) \times 0.09 = 237.15$ $(14000 - 237.15) \times 1.015$ $(19000 + 1500 - 16365) \times 0.09$ $= 372.15$ $(13969.29... - 372.15) \times 1.015$ $= \text{£}13801.09989$	(£)13801.10	M1 M1 M1 M1 A1	for $(19000 - 16365) \times 0.09 (= 237.15)$ for $(14000 - 237.15) \times 1.015 (= 13969.29...)$ for $(19000 + 1500 - 16365) \times 0.09$ or $237.15 + 0.09 \times 1500 (= 372.15)$ M1 for $(13969.29' - 372.15) \times 1.015 (= 13801.09989)$ A1 for answer in range 13801 – 13802
9.	$S_1 = 1.02 \times (15000 - 180 - 90) = 15024.6$ $S_2 = 1.02 \times (15024.6 - 180 \times 2 - 90) = 14866.09(2)$ $S_{n+1} = 1.02(S_n - 180(n+1) - 90)$ $S_n = 1.02(S_{n-1} - 180n - 90)$ $S_{n+1} - S_n = 1.02(S_n - 180(n+1) - 90 - S_{n-1} + 180n + 90)$ $T_{n+1} = 1.02T_n - 183.6$	$1.02 \times 14370 = 15024.6$ $14866.09(2)$ Shown with $k = 183.6$	B1 B1 M1 A1 C1 C1	for $1.02 \times (15000 - 180 - 90) = 15024.6$ for 14866.09(2) for $S_{n+1} - S_n = 1.02(S_n - 180(n+1) - 90 - S_{n-1} + 180n + 90)$ for $T_{n+1} = 1.02T_n - 183.6$ C1 statement that for some n , $T_n < 0$ C1 since $T_{n+1} = 1.02T_n - 183.6$ and $T_n < 0$ then $T_{n+1} < 0$ and hence $S_{n+1} < S_n$

TASK 3: COST AND PROFIT

Question	Working	Answer	Mark	Notes
10. (a)(i)		2750	M1	selects two independent rows and writes in a suitable form, e.g. $80x + 60y = 2600$ and $72x + 18y = 1980$
			M1	for correct method to eliminate one variable
			M1	for correct method to enable missing value in table to be found, e.g. using found value for x and substituting to find value of y
			A1	for $x = 25$ and $y = 10$ or $10x = 250$ and $10y = 100$ (or equivalent)
			A1	for 2750
(ii)		Cost increases by (£)40	B1	a correct statement about the change in cost and a correct numerical value
11. (a)(i)	$x > 4$ or $x \geq 4$	$x > 4$ or $x \geq 4$	B1	for $x > 4$ or $x \geq 4$
	$2y > x$ or $2y \geq x$	$2y > x$ or $2y \geq x$	B1	for $2y > x$ or $2y \geq x$ or $y > \frac{x}{2}$ or $y \geq \frac{x}{2}$
(ii)	The number of swing seats must be greater than or equal to 4		B1	for, e.g. the number of swing sets must be greater than or equal to 4
	There must be at least twice as many swing seats as benches	Correct interpretation	B1	for, e.g. there must be at least twice as many swing seats as benches (or equivalent)
(b)	$10x + 4y \leq 160$		M1	M1 for $10x + 4y \leq 160$ (condone $<$ at this stage)
	$5x + 2y \leq 80$	$5x + 2y \leq 80$	A1	A1 for $5x + 2y \leq 80$

Question	Working	Answer	Mark	Notes
c)	$30x + 20y \leq 600$ $5x + 2y = 80$ drawn correctly $3x + 2y = 60$ drawn correctly Correct region shown on graph unambiguously		B1 B1 B1 B1 B1	for $30x + 20y \leq 600$ (or equivalent, e.g. $3x + 2y \leq 60$) for “ $5x + 2y = 80$ ” drawn correctly for “ $3x + 2y = 60$ ” drawn correctly for correct shading for at least one inequality added to graph for correct region shown on graph unambiguously
(d)	$P = 65x + 40y$ stated/implied Using profit line or for identifying vertices as points to test $\pounds 1250, x = 10, y = 15$	$P = 65x + 40y$ $\pounds 1250, x = 10, y = 15$	M1 M1 A1	for $P = 65x + 40y$ or evidence that this has been used to determine profit for using profit line or for identifying vertices as points to test for $\pounds 1250, x = 10, y = 15$

For information about Edexcel, BTEC or LCCI qualifications
visit qualifications.pearson.com

Edexcel is a registered trademark of Pearson Education Limited

Pearson Education Limited. Registered in England and Wales No. 872828
Registered Office: 80 Strand, London WC2R 0RL
VAT Reg No GB 278 537121